


Lesson 73

1. Mr. Potter has 23 students in his class. If 17 of the students are boys and the rest are girls, how many girls are there in Mr. Potter's class?

There are _____ girls in Mr. Potter's class.

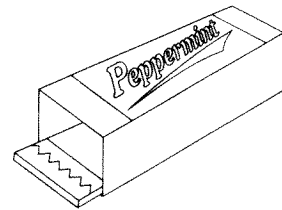
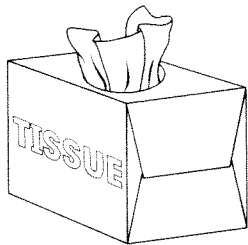
2. $22 - 7 =$

3. Look at the square. Circle the corners.
A square has _____ corners.



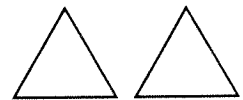
4. $118 + 10 =$

5. Look at the objects below. Circle all of the rectangular prisms.

**Lesson 74**

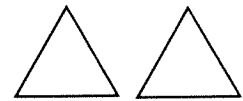
1. $64 + 35 =$

2. How many sides does a triangle have? _____



How many sides total would 4 triangles have?

Four triangles have _____ sides total.



3. $57 - 39 =$

4. $319 - 4 =$

5. Jamal checked out 18 books from the library in June. He checked out 25 books in July. How many more books did Jamal check out in July than in June?

Jamal checked out _____ more books in July than in June.